

TARGETER WINGS STANDARD SIX - YEAR 2021


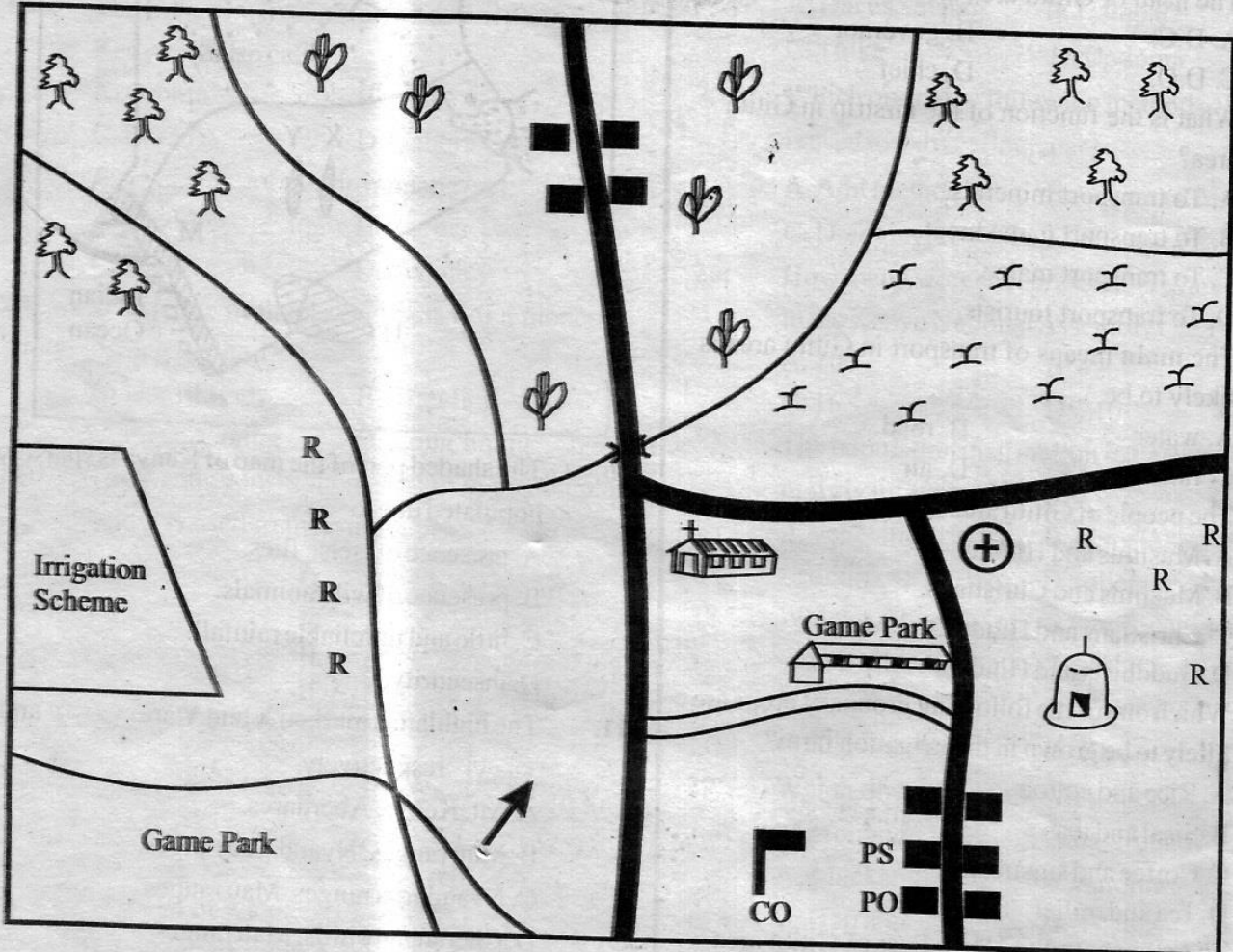
CONTINUOUS ASSESSMENT TEST

SOCIAL STUDIES & R.E

Wings
009

TIME: 2hrs 15 mins

GITTU AREA



KEY:

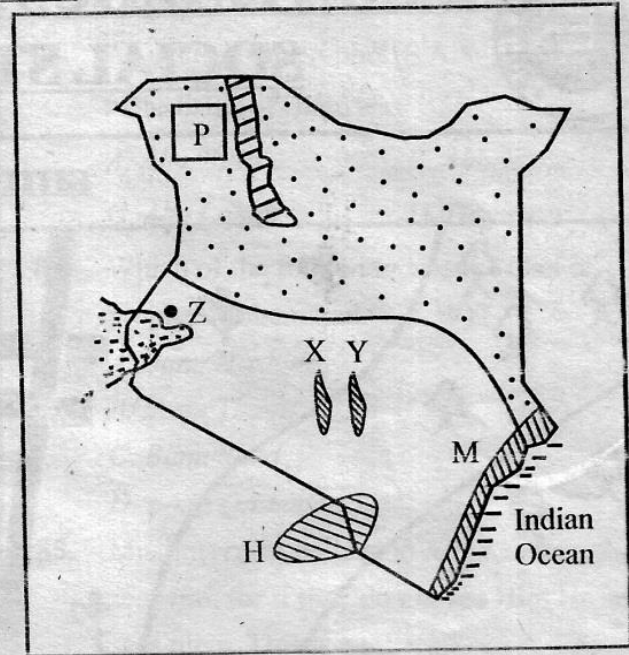
	Tarmac road		Forest	P.O.	Post Office
	Murrum road		Permanent buildings	P.S.	Police Station
	River and Bridge		Maize	SCH	School
	Church		Air strip	C.O.	County Office
	Mosque		Beans	R R R	Potatoes
	Hospital				

Study the map of Gititu Area above and then answer questions 1 to 7.

- The **main** economic activity carried out in Gititu area is
 - mining
 - farming
 - lumbering
 - manufacturing
- The head of Gititu area is
 - D.C.
 - governor
 - D.O.
 - chief
- What is the function of the airstrip in Gititu area?
 - To transport minerals.
 - To transport game meat.
 - To transport maize.
 - To transport tourists.
- The **main** means of transport in Gititu area is likely to be
 - water
 - road
 - railway
 - air
- The people of Gititu area are **mainly**
 - Muslims and Hindus.
 - Muslims and Christians.
 - Christians and Hindus.
 - Buddhists and Hindus.
- Which one of the following groups of crops are **likely** to be grown in the irrigation farm?
 - Rice and cotton
 - Sisal and tea
 - Coffee and sugarcane
 - Tea and millet
- The climate to the North East of Gititu area can be described as
 - cool and dry
 - hot and wet
 - cool and wet
 - cool and dry
- One of the results of the interaction between the Abagusii and Luo was that
 - the two communities borrowed customs from Nandi.
 - the Luo learnt the practice of rearing cattle from the Abagusii.
 - the Abagusii learnt the practice of fishing from the Luo.
 - the Luo pushed the Abagusii Southward to their present homeland.
- According to the Kenyan constitution, the parliament is made up of
 - National assembly and the senate.
 - County assembly and the senate.
 - National assembly only.
 - National assembly and county assembly.

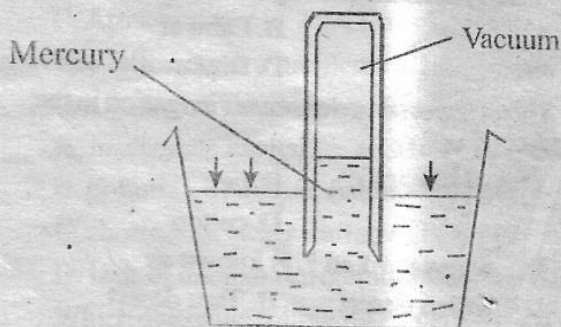
Use the map of Kenya below to answer questions

10-15.



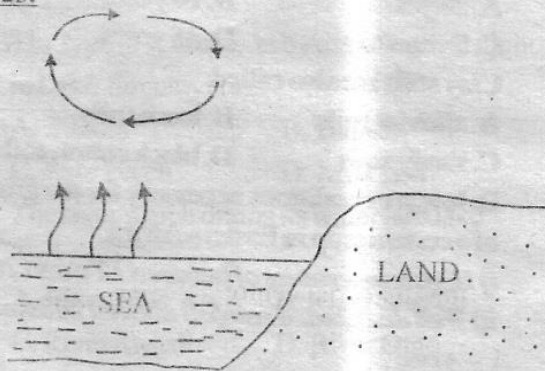
- The shaded part of the map of Kenya is sparsely populated due to
 - presence of tsetse flies.
 - presence of wild animals.
 - little and unreliable rainfall.
 - insecurity.
- The highlands marked X and Y are _____ and _____ respectively.
 - Mt. Kenya, Aberdares.
 - Mau ranges, Nyandarua ranges.
 - Nyandarua ranges, Mau ranges.
 - Cherangany hills, Mau ranges.
- The plains marked P are called
 - Loita plains
 - Awara plains
 - Bokhol plains
 - Lotikipi plains
- The community that occupies the area marked H is
 - Wapare
 - Maasai
 - Wachagga
 - Akamba
- The town marked Z started as
 - an administration centre.
 - a communication centre.
 - a fishing centre.
 - an industrial centre.
- The vegetation commonly found in the area marked M is
 - riverine vegetation
 - planted forest
 - mangroove forest
 - swamp vegetation

16. River Athi has its source at
 A. Mt. Kenya B. Taita hills
 C. Chyulu hills D. Ngong hills
17. The equivalent of a parliament in traditional Buganda kingdom was known as
 A. Lukiiko B. Katikiro
 C. Omulamuzi D. Omwanika
18. The Gala who live in North Eastern part of Kenya are also called
 A. Oromo B. Boni
 C. Borana D. Gabbra
19. _____ is not a basic human want.
 A. Clothing B. Shelter
 C. Food D. Vehicle
20. Which one of the following is **not** a modern fishing method?
 A. Use of traps B. Trawling
 C. Purse seining D. Long lining
21. The weather instrument shown in the diagram below is used to measure



- A. speed of wind.
 B. amount of rainfall.
 C. strength of the wind.
 D. atmospheric pressure.

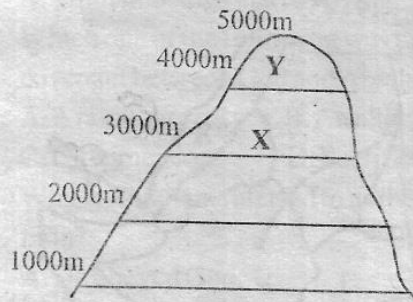
Use the diagram below to answer questions 22 and 23.



22. The above diagram shows
 A. a sea breeze. B. a land breeze.
 C. convectional rainfall. D. relief rainfall.

23. The above factor influencing climate is experienced **mostly** at
 A. noon B. day time
 C. midnight only D. night
24. _____ town developed as a result of industrial activities.
 A. Dar es Salaam B. Kampala
 C. Thika D. Dodoma
25. Which one of the following methods of mining is used to extract flourspar?
 A. Adit method. B. Open cast method.
 C. Dredging. D. Scooping.
26. How many women representatives are elected to the Kenya National Assembly?
 A. 200 B. 47
 C. 16 D. 210
27. The population distribution in Eastern Africa is **mainly** influenced by
 A. vegetation B. climate
 C. drainage D. relief
28. Which among the given crops would **not** be grown under irrigation?
 A. Sisal B. Cotton
 C. Sugarcane D. Rice
29. Which one of the following species of fish is **not** found in marine fishing ground?
 A. Mackerel B. Sardine
 C. Herrings D. Tilapia
30. The following are Highland Nilotes **except**
 A. Tugen B. Nandi
 C. Marakwet D. Njemps

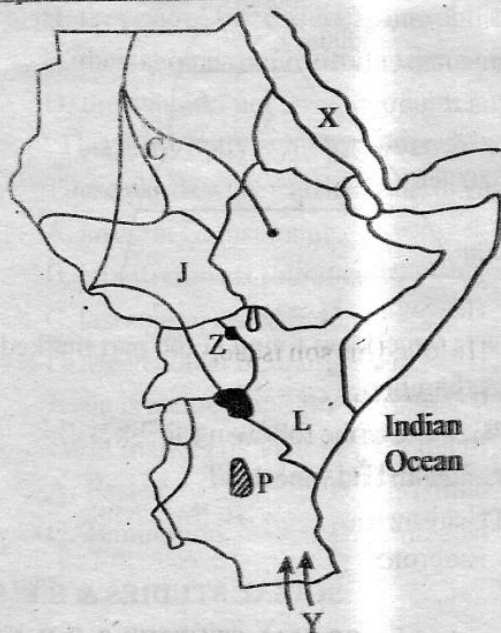
Use the diagram below to answer question 31 - 32.



31. The vegetation found at the part marked X is
 A. bamboo
 B. rainforest
 C. health and moorland
 D. savannah

32. Which one of the following is true about the part marked Y?
 A. The vegetation is rainforest.
 B. It has bare rocks and snow.
 C. It experiences high temperatures.
 D. It is always covered by clouds.
33. The source of River Nile is
 A. Mediterranean sea. B. Lake Victoria.
 C. Lake Kyoga. D. Indian Ocean.
34. Which one of the following industries is the most common in Eastern Africa?
 A. Service B. Manufacturing
 C. Processing D. Assembly
35. A group of people who descend from a common ancestor form a
 A. tribe B. clan
 C. family D. community
36. Which of the following explains what a school motto is all about?
 A. To entertain the pupils.
 B. School's location.
 C. School's identity.
 D. School's aims and beliefs.
37. Who among the following people is a member of the extended family?
 A. Sister B. Brother
 C. Nephew D. Mother
38. Tanganyika got her independence on 9th December 1961 under the political party called
 A. Chama Cha Mapinduzi.
 B. Tanganyika African National Union.
 C. Tanganyika African Association.
 D. Afro-Shirazi Party.

Use the map of Eastern African provided below to answer questions 39 - 45.



39. The water body marked X is called
 A. Mediterranean sea B. Gulf of Adent
 C. Indian Ocean D. Red Sea
40. The community that entered Tanzania through route Y is
 A. Makonde B. Ngoni
 C. Zulu D. Nyamwezi
41. The part marked P in Tanzania is sparsely populated due to
 A. military training activities.
 B. presence of tsetse flies.
 C. presence of vast swamp.
 D. presence of large forest.
42. The National park in Uganda marked Z is known as
 A. Kedepo valley game park.
 B. Bwidi game park.
 C. Queen Elizabeth game park.
 D. Ugalla River game park.
43. The following communities are found in the country marked J except
 A. Shilluk B. Labwor
 C. Nuer D. Dinka
44. The main crop grown under irrigation in the area marked C is
 A. sugarcane B. rice
 C. bananas D. cotton
45. The desert marked L is known as
 A. Ogaden desert B. Taru desert
 C. Chalbi desert D. Nubian desert
46. The leader of the Hehe uprising was
 A. Chief Mkwawa B. Kinjeketile Ngwale
 C. Nyungu ya Mawe D. Chief Fundikira
47. In Kenya, the official exercise of counting people country wide is conducted after every
 A. 20 years B. 10 years
 C. 5 years D. 35 years
48. Clay soils are also called
 A. alluvial soils B. loam soils
 C. sandy soils D. black cotton soils
49. Below are conditions necessary for the growth of a certain crop in Eastern Africa.
 i) High temperature of between 12° c and 26° c.
 ii) Well distributed rainfall above 1200mm per year.
 iii) Deep fertile and well drained soils.
 iv) Support for plants with fruits.
 v) Protection against strong winds.
 The crop described above is
 A. sugarcane B. maize
 C. banana D. cotton

50. The main tourist attraction along the Coast of Kenya and Tanzania is **not**
- A. wildlife B. slave caves
C. arab settlement D. sandy beaches
51. Which one of the following is **not** a densely populated area in Eastern Africa?
- A. Ethiopian Highlands.
B. South Western Ethiopia.
C. Lake Victoria Basin.
D. Kenyan Highlands.
52. Below is a description of a town in Tanzania.
- i) Located to the South West of Mt. Kilimanjaro.
ii) It is located on the slopes of Mt. Meru.
iii) It is the headquarters of East Africa Community.
iv) It houses the international criminal tribunal for Rwanda genocide.
- The town described above is
- A. Moshi B. Dodoma
C. Arusha D. Dar-es-Salaam
53. The following are problems facing sea fishing in Kenya and Tanzania **except**
- A. inadequate capital.
B. pollution of marine fishing grounds.
C. shortage of water during the dry season.
D. lack of enough refrigeration facilities.
54. Which one of the following Eastern African countries does the equator pass through?
- A. Ethiopia B. Somalia
C. South Sudan D. Tanzania
55. The smallest country in Eastern Africa is
- A. South Sudan B. Uganda
C. Djibouti D. Eritrea
56. The type of fish caught by use of light at night in Lake Tanganyika is
- A. Tilapia B. Dagaa
C. Nile Perch D. Mud fish
57. The river which drains its water into lake Turkana is
- A. River Juba B. River Shebelle
C. River Awash D. River Omo
58. The leading county in production of maize in Kenya is
- A. Nakuru B. Trans Nzoia
C. Bungoma D. Busia

59. Which one of the following is the major problem facing road transport in Kenya?
- A. Roads are expensive to build.
B. Traffic congestion.
C. Road accidents.
A. Poor roads.
60. Which one of the following is **not** an electronic media?
- A. Newspapers and magazines.
B. Television.
C. Radio.
D. Email.

SECTION B

CHRISTIAN RELIGIOUS EDUCATION

61. Which of the following does not show that human beings are special compared to other God's creation?
- A. Human beings named all animals and plants.
B. Human beings have dominion and power over everything God created.
C. God created human being in His own image.
D. Human beings were put in the Garden of Eden.
62. What did God create on the third day?
- A. The sea B. The birds
C. Human beings D. The moon
63. What was the **main** result of disobedience of human beings?
- A. Human beings were sent out of the Garden of Eden.
B. Human beings were cursed by God.
C. Human beings were made to sweat.
D. Human beings started dying.
64. Which one of the following was the sign of a covenant between God and Abraham?
- A. A rainbow B. An altar
C. Circumcision D. Sacrifice
65. Why is Abraham referred to as the father of faith?
- A. He obeyed God.
B. He was an old man.
C. He loved his son Isaac.
D. He had a barren wife.
66. Which one of the following abilities did Ohaliab and Bezalel lack?
- A. Healing B. Engraving
C. Embroidery D. Weaving

67. Which one of the following was **not** given to Gideon's army?
 A. A trumpet B. A jar
 C. A torch D. A sword
68. Who among the following anointed King Solomon as the third King of Israel?
 A. Nathan and Abiather.
 B. Samuel and Nathan.
 C. Zadok and Nathan.
 D. Abiather and Elijah.
69. Which one of the following was **not** done by angel Gabriel?
 A. Announced the birth of Christ.
 B. Appeared to Joseph, the father of Jesus in a dream.
 C. Predicted the birth of Jesus.
 D. Said Jesus would save His people from sins.
70. Who among the following were led by a star to see baby Jesus?
 A. The wisemen B. The shepherds
 C. The Pharisees D. Herod
71. By feeding 5000 men, Jesus showed a certain character. Which **one** is it?
 A. He is caring. B. He had faith.
 C. He was prayerful. D. He was also hungry.
72. The parable of the talents teaches Christians that
 A. they should use their ability well.
 B. they should have faith.
 C. they should never be afraid.
 D. they should not invest everything.
73. From the incident that Jesus shared a meal with Zacheaus, Christians learn that
 A. they should be very careful when dealing with sinners.
 B. they should win sinners through sharing.
 C. they should avoid sitting with sinners.
 D. they should not associate with any sinners.
74. "This is my body, which is given for you."
 These words were said by Jesus during His
 A. arrest at Gethsemane.
 B. crucifixion at Golgotha.
 C. last supper at Jerusalem.
 D. ascension at Bethany.
75. Jesus is a sure hope for mankind. Which event marks His victory over death?
 A. Easter B. Christmas
 C. Temptation D. Pentecost
76. Which one of the following New Testament books is a gospel?
 A. Hebrews B. Galatians
 C. John D. James
77. Jesus showed respect for the Jewish customs in the healing of the ten lepers by
 A. healing them at night.
 B. sending them to be examined by the priest.
 C. healing them on a Sabbath.
 D. placing hands on them.
78. Who among the following women was recommended by Paul to be received well by the church for being a good church worker?
 A. Priscilla B. Dorcas
 C. Aquila D. Phoebe
79. Gifts of the Holy Spirit are found in the book of
 A. Galatians B. 1st Corinthians
 C. Romans D. Ephesians
80. The early church prayed together, shared meals, shared the word of the Lord together. All these activities symbolized
 A. the Holy communion.
 B. charismatic renewal.
 C. selfishness.
 D. Passover.
81. Thika school for the blind is sponsored by the
 A. Catholic church.
 B. Anglican church of Kenya.
 C. Presbyterian Church of East Africa.
 D. Salvation Army.
82. "Whatever you do, work at it with all your heart, as if you are working for the Lord."
 (Colossians 3:23). These words were said by
 A. James B. Peter
 C. Paul D. Jesus
83. The ability to analyze the circumstances we find ourselves in and make a judgement is
 A. creative thinking
 B. assertiveness
 C. decision making
 D. critical thinking

84. Which among the following contributed towards narrowing the gap between the rich and the poor in traditional African society?
- They shared what they had.
 - They abandoned each other during problems.
 - They believed in Jesus.
 - They used charms to protect themselves from poverty.
85. Which one of the following is **not** a similarity between African creation stories and the Biblical stories of creation?
- God created man in His image and likeness.
 - God created human beings as male and female.
 - Everything was created by God.
 - God's power is seen in both.
86. Education in traditional African societies was meant for
- molding the character of young people.
 - helping people to get jobs.
 - assisting young people to get writing skills.
 - helping young men to become warriors.
87. Which among the following is **not** an activity done by the Ecumenical Association of the church?
- Helping the needy during epidemics.
 - Offering pastoral counselling to people.
 - Starting projects to promote peace and reconciliation among communities in conflict.
 - They come together to incite the government to mistreat its citizens.
88. The following are good ways of using our talents except?
- Offering guidance and counselling.
 - Stealing to get our daily needs.
 - Participating in games and sports.
 - Faith
89. Which one of the following is a fruit of the Holy Spirit.
- Faith
 - Speaking in tongues
 - Faithfulness
 - Preaching

90. The initials NCCCK stands for
- National Commission of Christian Churches of Kenya.
 - National Catholic Churches of Kenya.
 - National Christian Churches of Kenya.
 - National Council of Churches of Kenya.

SECTION B

ISLAMIC RELIGIOUS EDUCATION

61. Which one of the following was the first Surah to be revealed to prophet Muhammad (S.A.W)?
- Alaq*
 - Humaza*
 - Tiin*
 - Fatiha*
62. A person who does **not** fulfil his / her promises is known as
- munafiq*
 - muumin*
 - kaafir*
 - hafidh*
63. Which one of the following surah says that man was created in the **best** shape and mould?
- Alaq*
 - Zilzala*
 - Aadiyal*
 - Tiin*
64. The sunnah salat performed before any faradh salat is known as
- dhuha*
 - baadiya*
 - qabliya*
 - istikhara*
65. Who was the governor of Yemen that wanted to destroy the Kaabah?
- Ayub*
 - Ialut*
 - Abraha*
 - Yazid*
66. Which one of the following is the 1st month of the Islamic calendar?
- Ramadhan*
 - Shawwal*
 - Muharram*
 - Dhul-hujjah*
67. The angel of Allah (S.W.) were created from
- fire*
 - air*
 - light*
 - clay*
68. The faradh prayer that is performed at 1p.m. is known as
- Asr*
 - Subh*
 - Maghrib*
 - Dhuhr*
69. Who was the mother of prophet Isa (A.S.)
- Maryam*
 - Amina*
 - Khadija*
 - Zulekha*
70. Those who compete for wealth will receive severe punishment from Allah (S.W.). This is a teaching from surah.
- Takathur*
 - Asr*
 - Maun*
 - Falaq*

71. Which day of the week was prophet Mohammad (S.A.W.) born?
 A. Monday B. Friday
 C. Tuesday D. Sunday
72. Which one of the following surahs is the opening chapter of the Quran?
 A. Ikhlas B. Nas
 C. Falaq D. Fatiha
73. How old was prophet Muhammad (S.A.W) when his mother died?
 A. 8 years B. 7 years
 C. 10 years D. 6 years
74. The book of Injeel was given to prophet
 A. Musa B. Issa
 C. Mohammad D. Daud
75. The angel of Allah (S.W.) who takes souls from people is known as
 A. Izrail B. Mikail
 C. Israfil D. Ridhwan
76. Which pillar of Islam must be done in Makkah?
 A. Saum B. Hajj
 C. Zakat D. Salat
77. What would be the **best** course of action for you to take if your friend started abusing drugs?
 A. Report him to the police.
 B. Stop your friendship.
 C. Inform all your friends.
 D. Advise him to seek guidance and counseling.
78. Which sunnah prayer is performed **only** during the month of Ramadhan?
 A. Witr B. Tahajud
 C. Taraweh D. Dhuha
79. The second month of the Islamic calendar is
 A. Muharram B. Sai
 C. Shawwal D. Dhul-Qaada
80. How many rakaat are there in salatul subh?
 A. Four B. Two
 C. Three D. One
81. How many Muslims fought in the battle of Uhud?
 A. 1000 B. 10000
 C. 313 D. 3000
82. The second battle in the history of Islam was
 A. Badr B. Khandak
 C. Uhud D. Hunain
83. An uncle of the prophet (S.A.W) who was killed in the battle of Uhud was
 A. Abu Talib B. Abbas
 C. Abu Lahab D. Hamza
84. Which of the following was the clan of prophet Mohammad (S.A.W)?
 A. Banu Hashim
 B. Banu Thaqif
 C. Banu Saad
 D. Banu Qainuqaa
85. Muslims must believe in Allah as though they see Him, for if they do not see Him He surely sees them. This is a pillar of
 A. Iman B. Ihsaan
 C. Religion D. Islam
86. Who among the following prophets of Allah was swallowed by a whale?
 A. Ibrahim B. Idrin
 C. Nuh D. Yunus
87. What should a Muslim say when he / she see something good?
 A. Maashalah
 B. Inshallah
 C. Subhwallah
 D. Varkamkallah
88. How many times should a Muslim perform salat on a daily basis?
 A. Four B. Five
 C. Two D. Three
89. Which one of the following acts can spoil salat?
 A. Standing
 B. Takbiratul Ihram
 C. Breathing
 D. Laughing
90. Which one is **not** a characteristic of angels?
 A. They ate and drink.
 B. They can change their shape.
 C. They are made from light.
 D. They are neither male or female.