

GRADE 1 TERM 2 EXAMS 2020

MATHEMATICS


000

DATE:


NAME: SCHOOL:

Count and write in words


1.




2.




3.



4.



5.



Write the missing numbers

6. 20 _____, _____, _____ 24, 25

7. 13 _____ 11 _____ 9 _____

8. 44, 45 _____, _____ 48 _____

9. 3 _____ 5 _____, _____ 8 _____

10. _____ 56 _____ 58 _____ 60

11. 3 tens 4 ones = _____

12. 8 tens 0 ones = _____

13. 79 = _____ tens _____ ones

14. 63 = _____ tens _____ ones

15. 6 tens = _____

16. $2 + 4 =$ _____

17. $7 + 1 =$ _____

18. $3 + 2 =$ _____

$$\begin{array}{r} 19. \quad 4 \\ + 4 \\ \hline \end{array}$$

$$\begin{array}{r} 20. \quad 6 \\ + 3 \\ \hline \end{array}$$

$$\begin{array}{r} 21. \quad 8 \\ + 3 \\ \hline \end{array}$$

$$\begin{array}{r} 22. \quad 10 \\ + 4 \\ \hline \end{array}$$

Fill in the missing numbers

23. $3 + \underline{\quad} = 9$

24. $\underline{\quad} + 5 = 9$

25. $4 + \underline{\quad} = 8$

Take away

26. $6 - 4 = \underline{\quad}$

27. $7 - 3 = \underline{\quad}$

28. $9 - 3 = \underline{\quad}$

29. $4 - 4 = \underline{\quad}$

30. How many bottles have water?



$$\begin{array}{r} 31. \quad 40 \\ - 10 \\ \hline \end{array}$$

$$\begin{array}{r} 32. \quad 60 \\ - 20 \\ \hline \end{array}$$

$$\begin{array}{r} 33. \quad 90 \\ - 50 \\ \hline \end{array}$$

$$\begin{array}{r} 34. \quad 50 \\ - 30 \\ \hline \end{array}$$

Match these numbers and words

35. 15 twelve

36. 20 eight

37. 8 fifteen

38. 12 twenty


39. $1 + 3 + 2 = \underline{\quad}$

40. $2 + 3 + 4 = \underline{\quad}$

41. 1 year has $\underline{\quad}$ months

42. 2 dogs have $\underline{\quad}$ legs

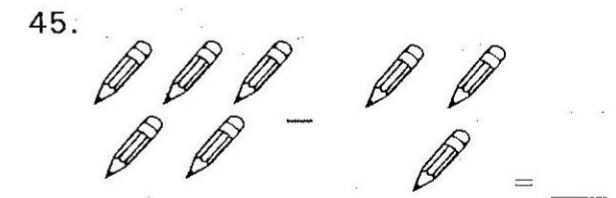
43. Which tree is taller?



A

B

44. Take away
 $000000 - 00 = \underline{\quad}$



Find the next number in each of the following patterns

46. 13, 14, 15, 16 $\underline{\quad}$

47. 5, 10, 15, 20 $\underline{\quad}$

48. 19, 18, 17, 16 $\underline{\quad}$

49. 8, 10, 12, 14 $\underline{\quad}$

50. 60, 50, 40, 30 $\underline{\quad}$