

TERM 3 EXAM 2020



STD ONE



MATHEMATICS



Name _____



Date _____


Count and write

1.  +  = _____

2.  +  = _____

3.  +  = _____



4.  +  = _____

5.  = _____

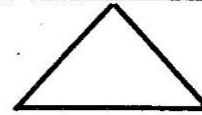
Fill in the missing numbers

6. _____, _____, 13, _____, 15, _____
 7. 1, 2, _____, _____, 5, _____, 7
 8. 23, _____, _____, 26, _____, 28

Name the shapes


9.  _____
 10.  _____

11.




(Rectangle, circle, triangle)

Add

12. $5 + 6 =$ 

13.
$$\begin{array}{r} 6 \\ + 3 \\ \hline \end{array}$$

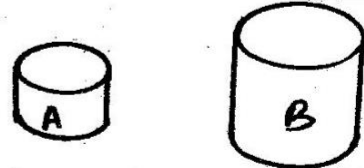
14. $2 + 3 + 1 =$ 

15.
$$\begin{array}{r} 10 \\ + 6 \\ \hline \end{array}$$

16.
$$\begin{array}{r} 1 \\ + 5 \\ \hline 2 \\ \hline \end{array}$$

17.
$$\begin{array}{r} 7 \\ + 0 \\ \hline \end{array}$$

18. Which holds less? _____



Write in words

19. eleven _____
 20. six _____
 21. 9 _____
 22. twenty _____
 23. 1 _____

Fill in the blank space


24. $\underline{\quad} + 4 = 6$

25. $7 + \underline{\quad} = 10$

26. $8 + \underline{\quad} = 8$

27. $4 + 3 = \underline{\quad}$

28. Which is the short one?



Take away

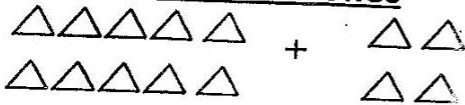
29. $9 - 2 = \underline{\quad}$

30. $6 - 6 = \underline{\quad}$

30. $17 - 5 = \underline{\quad}$

31. $3 - 1 = \underline{\quad}$

Write tens and ones



33. $\underline{\quad}$ tens $\underline{\quad}$ ones

34. $47 = \underline{\quad}$ tens + $\underline{\quad}$ ones

35. $34 = \underline{\quad}$ tens + $\underline{\quad}$ ones

36. How many days are there in a week? $\underline{\quad}$

(five, seven)





37. $14 - 3 = \underline{\quad}$

38.
$$\begin{array}{r} 18 \\ - 9 \\ \hline \\ \hline \end{array}$$

39.
$$\begin{array}{r} 8 \\ + 10 \\ \hline \\ \hline \end{array}$$

Name the lines

40. 
(straight, curved) $\underline{\quad}$


(straight, curved) $\underline{\quad}$


42.
$$\begin{array}{r} 20 \\ + 30 \\ \hline \\ \hline \end{array}$$

43.
$$\begin{array}{r} 30 \\ - 10 \\ \hline \\ \hline \end{array}$$

44.
$$\begin{array}{r} 20 \\ + 20 \\ \hline \\ \hline \end{array}$$

45. $20 - 10 = \square$

46. How many are tall? $\underline{\quad}$



47. Arrange from the smallest
7, 9, 11, 10, 8

Match the pictures

