


GRADE 2 MATHS

TERM 1 2020


| | |
|---------|--|
| NAME: | |
| SCHOOL: | |

Count and write the number.

1.



2.



Fill in the missing numbers.

3. 10, 20, 30, _____, _____

4. 34, 36, 38, _____, _____

Add:-

5. $3 + 12 =$ _____

6. $33 + 4 =$ _____

How many tens and ones are there?

7. 13 is _____ tens _____ ones

8. 59 is _____ tens _____ ones

9. _____ is 4 tens 7 ones.

10. _____ is 2 tens 8 ones.

Take away

11. $16 - 4 =$ _____

12. $60 - 20 =$ _____

13.
$$\begin{array}{r} 90 \\ - 50 \\ \hline \end{array}$$

14.
$$\begin{array}{r} 18 \\ - 5 \\ \hline \end{array}$$

Write the numbers in words.

15. 5 _____


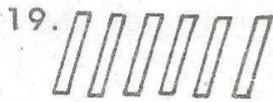

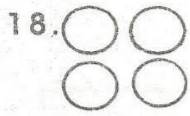
16. 8 _____

17. 11 _____

GRADE 2 MATHS


TERM 1 2020

Circle the group with more.

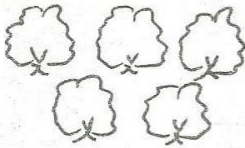


Circle the group with less.

20.



21.



Find the missing numbers.

22. $15 + \square = 18$

23. $\square + 7 = 13$

24. Kache has 2 books. Karisa has 12 books. How many books do they have altogether? _____

25. Which is smooth? _____




GLASS




STONE


26. Which one is lighter? _____



Draw the shapes.




27. Circle



28. Oval

Complete the pattern



30. I have _____ hands.