

GRADE 1 MATHEMATICS ACTIVITIES

TERM 1 2020


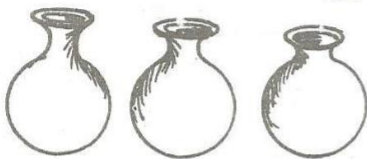
NAME: _____

SCHOOL: _____

1. Which objects are similar or look alike?



2. Count and match.



3. Which hold more? (tick)



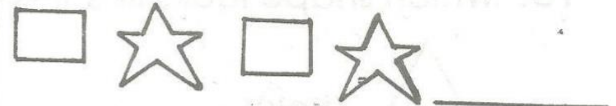
4. Write numbers 1-20.

1	2	3	4	5
6	7	8	9	10
11	12	13	14	15
16	17	18	19	20

5. Which object is shorter?



6. Which patterns come next in the series?



7. Complete the following pattern.



GRADE 1 MATHEMATICS ACTIVITIES

TERM 1 2020

8. Write the values.

5 = _____

7 = _____

6 = _____

9 = _____

Circle the correct number.

9. 5 _____ 6 3 5



10. 7 _____ 9 0 7

11. 4 _____ 10 4 8

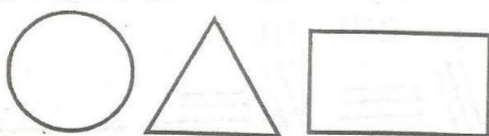
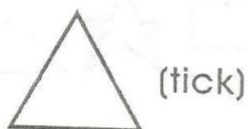
12. 9 _____ 1 6 9

13. 3 _____ 2 3 6


14. Which shape looks like this?



15. Which shape looks like this?



16. Which are the same size?
(circle)



Put together (+)

17. $5 + 2 =$ _____

18. $6 + 5 =$ _____

19. $8 + 2 =$ _____

20. $3 + 4 =$ _____

21. $5 + 5 =$ _____

22. $7 - 2 =$ _____

23. $9 - 3 =$ _____

24. $8 - 2 =$ _____

Count and fill the numbers.

25. 6, _____, 8, 9, _____

26. _____, 4, 5, _____

27. 1, _____, _____, 4, 5

28. $4 - 3 =$ _____

29. $2 + 3 + 2 =$ _____

30. Write the value.

4 = _____