

GRADE 1 TERM 1 EXAMS-2019

MATHEMATICS


NAME SCHOOL

Fill the missing numbers

1. 1 _____ 6 _____
_____ 10

Count and write

2.  _____

3.  _____

4.  _____

Write in words

5. 4 _____




6. 2 _____



7. 1 _____

8. 3 _____

Put together

9.  +  = _____

10.  +  +  = _____

11.  +  = _____

Take away

12.  -  = _____

13. $5 - 2 =$ _____

14.  -  = _____

15. Which one holds more water?








A



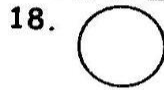
B _____

Complete the patterns below.

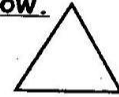
16.       _____

17.      _____

Name the shapes below.



19. _____



(triangle, circle, rectangle)

Write in order

21. 4 3 1 2 5

Draw the beads

