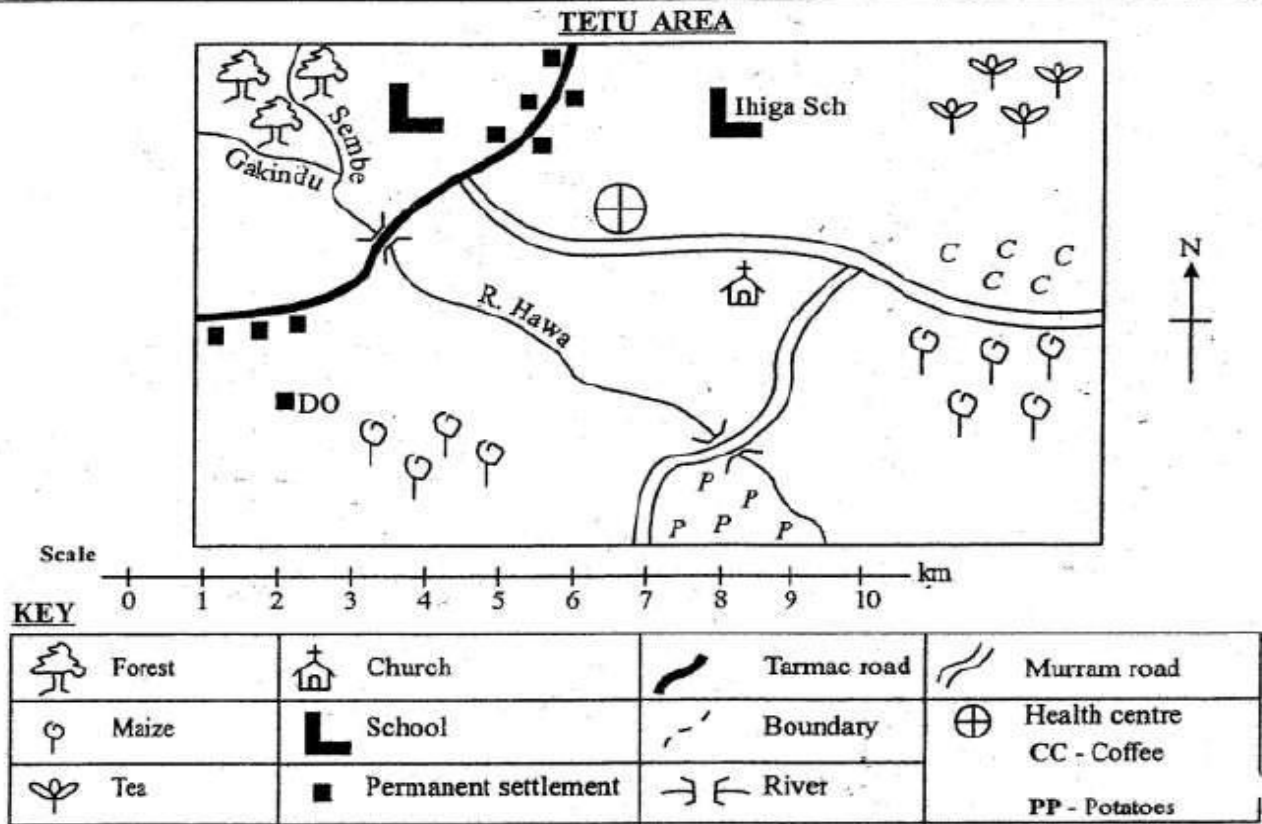


# STANDARD FIVE MID TERM TWO EXAM 2018 MATHEMATICS

Time: 2hrs 15min

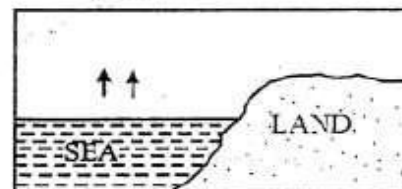


Study the map of Tetu area and answer questions 1 - 7

1. The **main** means of transport in Tetu area is  
A. air                                      B. water  
C. railway                                D. road
2. The people of Tetu area are **mainly**  
A. Pagans                                B. Christian  
C. Muslims                                D. Hindus
3. \_\_\_\_\_ is the **main** economic activity in the area  
A. Mining                                B. Sawing timber  
C. Crop farming                        D. Dairy farming
4. The **main** cash crops grown in Tetu area are  
A. tea and potatoes                    B. maize and coffee  
C. potatoes and maize                D. tea and coffee
5. The position of the school from the potatoes growing area is  
A. North East                            B. South East  
C. North West                           D. North
6. Tetu area is **likely** to be a  
A. district   B. location   C. division   D. county

7. River Hawa has \_\_\_\_\_ tributaries  
A. 2      B. 3      C. 1      D. 0
8. Many trees growing together make a  
A. agro tree                              B. plantation  
C. forest                                 D. vegetation
9. The **main** type of vegetation found in swampy area is  
A. forest                                 B. grass  
C. shorty thorn trees                 D. reeds
10. The **main** occupation of the lake Victoria is  
A. cultivation                            B. swimming  
C. fishing                                 D. livestock farming

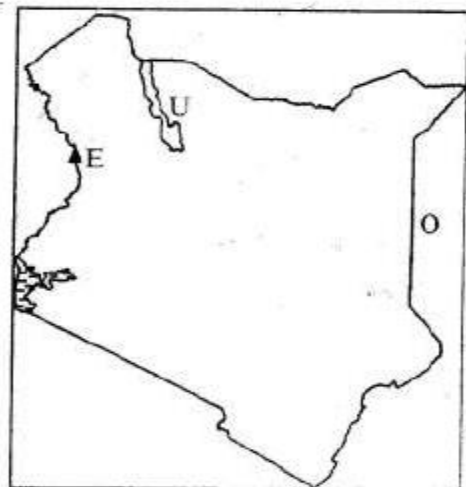
Use the diagram below to answer questions 11-12



BRONZE

11. The type of rain commonly falls in the \_\_\_\_ and Lake Victoria regions  
A. Coastal B. Central highland  
C. Nairobi D. Western highland
12. The type of rain shown in the diagram above is called \_\_\_\_ rain.  
A. long B. relief C. highland D. convectional
13. The word Nyika means  
A. cold area B. hot area  
C. swampy D. dry area
14. One of the following is **not** a traditional industry. Which one?  
A. Motor vehicle making B. Pottery  
C. Iron working D. Basketry
15. Which among the following is **not** a moral value?  
A. Kindness B. Honesty  
C. Forgiveness D. Selfishness
16. Which of the following is **not** an element of a map?  
A. Title B. Colour C. Key D. Frame
17. All the following show importance of democracy among pupils in a school **except**.  
A. participating in making class rules  
B. making decision on which game to choose  
C. choosing class prefects from their religious groups only  
D. respecting on others ideas during debates

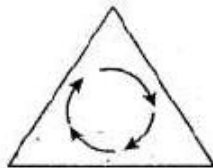
Use the map of Kenya below to answer questions 18 - 20



18. The mountain marked E is known as Mt  
A. Longonot B. Elgon  
C. Aberdare D. Suswa
19. The country marked O is called  
A. Somalia B. Uganda C. Ethiopia D. Sudan
20. The lake marked U is called  
A. Naivasha B. Victoria  
C. Turkana D. Nakuru
21. The following are qualities of a good citizen **except**

- A. promote peace  
B. own many things  
C. treat other people fairly  
D. love their countries
22. The longest river in Kenya is  
A. R. Kerio B. R. Tana C. R. Kerio D. R. Sabaki
23. The following are members of the county executive committee **except**  
A. members of county assembly  
B. executive county members  
C. deputy county governor  
D. county governor
24. The type of vegetation that consists of trees growing close together with grass growing under the trees is called  
A. forest vegetation B. savanna woodland  
C. savanna grassland D. swamp vegetation
25. Which one of the following is **not** a duty of the governor?  
A. They receive important visitors in the county  
B. The head of the county executive committee  
C. To initiate development in the county  
D. To elect members of the county assembly
26. The following are importance of working together in the community **except**  
A. the sick people are taken care of  
B. the needy children are educated  
C. weak members in the community feel hated  
D. people are able to build hospital
27. Three of the following specialist are allowed to treat sick people today **except**  
A. a herbalist B. a doctor  
C. a dentist D. a witchdoctor
28. Which among the following animal was **not** used for transport in the past?  
A. Camel B. Donkey C. Goat D. Oxen
29. Dairy cattle are **mainly** kept in \_\_\_\_ climate  
A. hot and dry B. cool and wet  
C. warm and hot D. warm and dry
30. People in Kenya are **mainly** grouped according to  
A. the language they speak  
B. the area where they live  
C. the type of clothes they wear  
D. the colour of their skin
31. An area represented by a member of county assembly is a  
A. county B. sub-county  
C. constituency D. ward
32. Which of the following weather instrument can be used to tell the coldness of a place?  
A. Raingauge B. Windvane  
C. Thermometer D. Windsock
33. Which of the following is **not** a county in Kenya?  
A. Nairobi B. Mombasa C. Nyeri D. Maasai
34. Which of the following is **not** an importance of moral values?

- A. Enable people to practice love  
B. Respecting each other  
C. Promoting unity and harmony  
D. Treating old people with unkindness
35. Which of the following was **not** inter-community interdependence in the past?  
A. Ceremonies B. Festivals  
C. Praise and worship D. Learning in school
36. The following are importance of fishing **except**  
A. source of unemployed  
B. source of food  
C. source of raw material to industries  
D. source of income
37. Which one of the following statement explains the meaning of transport? It is  
A. the movement of people and good from one place to another  
B. the transfer of a message from one place to another  
C. the lifting of passenger  
D. the movement of goods only from one place
38. Which of the following is **not** a reason for working together?  
A. Difficult tasks become easy  
B. People feel wanted  
C. People become united  
D. People needs are not catered for
39. Which one of the following explains the meaning of trade?  
A. Buying and selling of goods and services  
B. Goods bought from other countries  
C. Money obtained from selling goats  
D. Goods sold to other countries
40. The road sign below show



- A. road junction B. cattle crossing  
C. train crossing D. roundabout
41. Which one of the following is **not** a way of communication used in the olden days?  
A. Messenger B. Smoke  
C. Drumming D. Telephone
42. The following are ways of resolving disagreement in school **except**  
A. involving pupils in making class rules  
B. discussing the problem with pupils  
C. saying sorry when you are wrong  
D. giving materials to your friend only
43. Which one of the following social activities is **not** carried out around our school?  
A. Singing songs  
B. Playing football  
C. Digging on the farm  
D. Worshipping in the church

44. Two types of plants found in swamp vegetation are  
A. cactus and papyrus  
B. papyrus and reeds  
C. thorny bushes and mangroove  
D. papyrus and mangroove
45. The original home of Bantu was  
A. Sudan B. Southern Ethiopia  
C. Somali D. Congo
46. Exchange of goods for goods in trade is known as \_\_\_\_\_ trade.  
A. barter B. cash price C. buying D. privacy
47. Kenya got its independence in  
A. 1964 B. 1963 C. 2012 D. 1960
48. We celebrate Madaraka day on  
A. 1st June B. 1st May  
C. 25th December D. 12th December
49. Killing of wild animal illegally is done by  
A. tourists B. wardens  
C. police D. poachers
50. Which of the following is **not** a physical feature?  
A. House B. River  
C. Mountain D. Valley
51. Which of the following groups of people are Bantus?  
A. Agikuyu, Akamba, Ameru  
B. Agikuyu, Luo, Turkana  
C. Abagusii, Luo, Tugen  
D. Akamba, Samburu, Abakuria
52. Crops that are grown only to be eaten are known as  
A. food crops B. irrigation crops  
C. major crops D. cash crops
53. The sun sets in the  
A. West B. East C. South D. North
54. It is important to have a title on a map because it is  
A. written on the top of the map  
B. a heading  
C. the name of the map  
D. shows the area represented by the map
55. River Nyiro drains into the  
A. Lorian swamp B. Lake Victoria  
C. Indian Ocean D. R. Tana
56. Which community below is **not** a member of Western Bantus?  
A. Abagusii B. Abaluhya  
C. Abakuria D. Ambeere
57. \_\_\_\_\_ is the type of population where many people live in one place.  
A. Linear population B. Scattered population  
C. Sparsely population D. Densely population
58. The following are qualities of a good citizen **except**  
A. does not break laws  
B. work for their country  
C. treat all Kenyans equally  
D. does not attend national celebrations
59. A \_\_\_\_\_ is a person who is always ready to defend his or her country.  
A. Obedient B. Honest C. Fair D. Patriot

60. The parliamentarians in Kenya meet in parliament to  
 A. employ teachers B. discuss people  
 C. make laws D. elect the president

**SECTION II**  
**CHRISTIAN RELIGIOUS EDUCATION**

61. "You created every part of me, you put me together in my mother womb." These words are found in the book of  
 A. Genesis B. Psalms C. Luke D. Matthew
62. Abraham was told to offer Isaac as a sacrifice in the land of  
 A. Uriah B. Moriah C. Jericho D. Bethel
63. During the time of Noah and floods, how many people entered the ark?  
 A. Eight B. Two C. Seven D. Five
64. Which of the following people in the bible made good choices?  
 A. Cain and Esau  
 B. Adam and Eve  
 C. Abraham and Isaac  
 D. Annanias and Sapphira
65. When Moses was called by God, he was living in the land of  
 A. Egypt B. Canaan C. Midian D. Israel
66. I praise you for I am fearfully and wonderfully made. (Psalms 139:14) The above word were said by  
 A. Moses B. Jesus C. Herod D. David
67. The only commandment with promise is  
 A. respect your father and mother  
 B. do not steal  
 C. do not commit murder  
 D. observe the Sabbath
68. Which of the following is true about King Solomon?  
 A. Asked God for a child  
 B. He asked for wisdom  
 C. Asked God to give him wealth  
 D. Was the first king of Israel
69. Prophet \_\_\_\_\_ helped in the multiplication of flour and oil to the widow of Zarephath?  
 A. Elisha B. Elijah C. Micah D. Isaiah
70. Who prophesied about the birth of the Prince of peace?  
 A. Jeremiah B. Micah C. Isaiah D. Elisha
71. The parents of John the baptist were  
 A. Angel Gabriel and Mary  
 B. Elizabeth and Zachariah  
 C. Zachariah and Hannah  
 D. Elizabeth and Elikanah
72. Where did Joseph and Mary go to be registered?  
 A. Bethlehem B. Nazareth  
 C. Samaria D. Jericho
73. One of the following people was healed by Jesus on his way to Jericho. Who was he?  
 A. Ten lepers B. Bartimaeus  
 C. Legion D. Jairus daughter
74. When Jesus taught about love for our neighbour he used the parable of  
 A. Good samaritan  
 B. Pharisee and the tax collector

- C. Parable of sower  
 D. Prodigal son
75. The first disciples to be called by Jesus were  
 A. Simon and Andrew B. James and John  
 C. Philip and Thomas D. Simon and John
76. Christian learn to live in what they believe from life of  
 A. Ahab B. Anania C. Stephen D. Eve
77. Before the arrest of Jesus, He went to pray on Mt.  
 A. Kenya B. Sinai C. Olives D. Horeb
78. Jesus was crucified outside the city of  
 A. Judea B. Galilee C. Samaria D. Jerusalem
79. Jesus disciples recognised Him on their way to Emmaus when He  
 A. asked them questions  
 B. explained the scriptures  
 C. walked with them  
 D. broke the bread
80. Where were believers first called Christians?  
 A. Bethlehem B. Jerusalem  
 C. Antioch D. Capernaum
81. In traditional African communities work is shared according to people's  
 A. age B. family C. wisdom D. friends
82. In traditional African society boys and girls were allowed to mix freely during  
 A. initiation B. feasting and dancing  
 C. sacrifices D. time of war
83. Among the following which one was not a way of expressing peace in traditional African society?  
 A. Talking to each others B. Going to court  
 C. Taking an oath D. Sharing a meal
84. New life in Christ begins when we  
 A. take care of our books  
 B. are born  
 C. helping in the church  
 D. accept the call of Jesus and obey him
85. A pupil in your class is suffering from HIV/AIDS. What should you do as a christian?  
 A. Hate him B. Chase him away  
 C. Love him D. Tell everyone
86. When Jesus calmed the storm, He proved that he had power over  
 A. food B. life C. nature D. death
87. Who is a neighbour?  
 A. My best friend  
 B. My classmate  
 C. One who is in need to help  
 D. One who share book with
88. If I feel bad about something good that my neighbour has, which commandment am I breaking?  
 A. Do not accuse anyone falsely  
 B. Do not kill  
 C. Do not covet other people's property  
 D. Do not worship any other God's apart from me
89. During the birth of Jesus the shepherds were guided by a  
 A. cloud B. star C. sun D. moon
90. Which of the following acts will discourage peace in a community?  
 A. Being truthful B. Being honest  
 C. Being selfish D. Being humble