

SOCIAL STUDIES AND K.C.P.E RELIGIOUS EDUCATION

K.C.P.E PREDICTIONS

TIME: 2HRS 15 MINS

STD 8

READ THESE INSTRUCTIONS CAREFULLY

1. You have been given this booklet and a separate answer sheet. The question booklet contains 90 questions.
2. Do any necessary rough work in this booklet
When you have chosen your answer, mark it on the Answer sheet, not in this question booklet.

HOW TO USE THE ANSWER SHEET

4. Use only an ordinary pencil.
5. Make sure that you have written on the answer sheet:
YOUR INDEX NUMBER
YOUR NAME
NAME OF YOUR SCHOOL
6. By drawing a dark line inside the correct numbered boxes mark your full Index Number (i.e. School Code Number and the three-figure Candidate's number) in the grid near the top of the answer sheet.
7. Do not make any marks outside the boxes.
8. Keep the sheets as clean as possible and do not fold it
9. For each of the questions 1-50 four answers are given. The answers are lettered A, B, C and D. In each case only ONE of the four answers is correct. Choose the correct answer.
On the answer sheet the answer is to be shown by drawing a dark line inside the box in which the letter you have chosen is written.

Example

In the Question Booklet:

9. Which of the following groups of people belong to a nuclear family?

- A. Mother, Son, Grandfather
- B. Father, Son, Uncle
- C. Father, Daughter, Son
- D. Grandmother, Father, Daughter

The correct answer is C.

On the answer sheet:

9. [A]. [B]. [C]. [D]

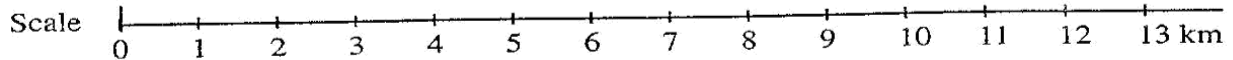
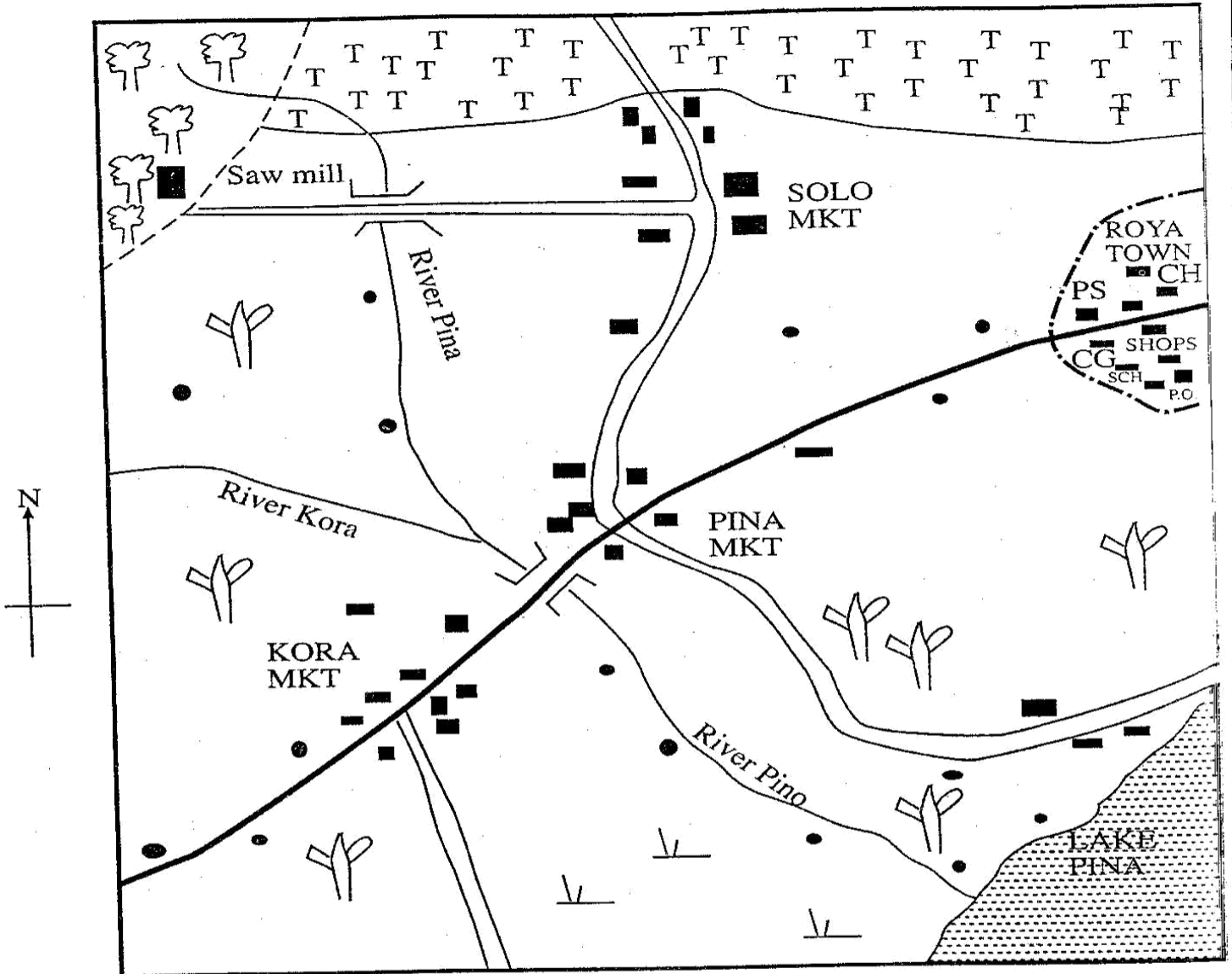
In the set of boxes numbered 9, the box with the letter C printed in it is marked.

11. Your dark line **MUST** be within the box.

12. For each question **ONLY ONE** box is to be marked in each set of four boxes.

K.C.P.E PREDICTION ONE - S/S/RE 2HRS 15 MINS

PINA AREA



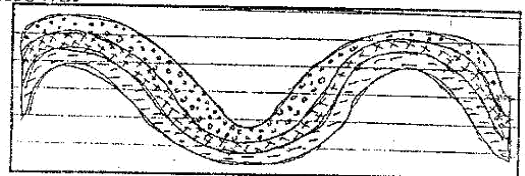
KEY	
	Tarmac road
	Murrum road
	River and bridge
	Forest reserve boundary
	Town boundary
SCH -	School
MKT -	Market
CH -	Court house
	Tea Planation
	Forest
	Scattered trees
	Scrub
	Permanent buildings
	House
TR -	Tourist resort
CG -	County Government Offices
PS -	Police Station

Study the map of Pina area and answer questions 1 to 7

1. The land in Pina area slopes towards
 - A. North West
 - B. South West
 - C. South East
 - D. South
2. What is the length of the tarmac road from the junction with murram road at Pina market to the South Western end?
 - A. 19.8km
 - B. 8.5km
 - C. 12.5km
 - D. 10km
3. A business man at Solo market wants to build a kiosk using locally available materials. The kiosk is likely to be built of
 - A. Stones
 - B. Timber
 - C. Clay soil
 - D. Bricks
4. The climate of the Southern part of the map is likely to be
 - A. Hot and dry
 - B. Cool and wet
 - C. Hot and wet
 - D. Cool and dry
5. The source of revenue for Roya town is likely to be
 - A. Sale of trade licenses to the shopkeepers
 - B. Collection of fines from the court
 - C. Sale of stamps at the post office
 - D. Value added Tax (VAT) paid by the people in the town
6. Which one of the following statements is true about Pina area?
 - A. Settlement in the area is mainly influenced by means of transport
 - B. The southern part of the area receives more rainfall than the Northern part
 - C. Fishing is carried out in lake Pina
 - D. River Pina forms a delta at its mouth
7. Three of the following economic activities are carried out in Pina area EXCEPT
 - A. Tourism
 - B. Fishing
 - C. Trading
 - D. Lumbering
8. The purpose of education in traditional African society was
 - A. To prepare youth for adult roles
 - B. To prepare the youth for higher education
 - C. To prepare the youth for employment
 - D. To encourage the youth to go to school

9. Congestion and overcrowding in towns can best be reduced by
 - A. Construction of better roads in towns
 - B. Construction of more houses in the towns
 - C. Setting up more industries in rural areas
 - D. Creating new towns
10. Three of the following are benefits of interaction. Which one is not?
 - A. It promotes spiritual growth
 - B. It facilitates learning of new ideas
 - C. It creates intolerance among communities
 - D. It creates understanding among people
11. Who among the following early visitors was a trader?
 - A. Dr. David Livingstone
 - B. Seyyid Said
 - C. Vasco da Gama
 - D. John Rebmann
12. The following are the conditions necessary for the growth of a crop.
 - i) High temperatures of between 24°C – 28°C
 - ii) Rainfall of about 2000mm per a year
 - iii) Low altitude of 750m above sea level
 - iv) Deep fertile soils
 Which of the crops listed below grows in the above conditions
 - A. Sugarcane
 - B. Pyrethrum
 - C. Cocoa
 - D. Cotton
13. The spinning of the earth on its own axis causes
 - A. The four seasons
 - B. Change in the position of the sun
 - C. The eclipse of the sun and moon
 - D. Day and night

The diagram below shows the structure of a type of a mountain. Use it to answer the question that follows.



14. Which of the following mountains was formed using the process show on the diagram?
 - A. Karas mountains
 - B. Atlas mountains
 - C. Drankesberg mountains
 - D. Akwapim mountains
15. Below are statements that describe the organization of an African traditional government.
 - i) They practiced African traditional religion
 - ii) They engaged in weaving and smelting iron
 - iii) They believed in life after death
 - iv) The position of the king was inherited by the sister's son

26. Three of the following are reasons why Samouri Toure was able to resist the French for a long time. Which one is NOT?
- He had a strong army
 - He used scorched earth policy tactics
 - The Christians in his territory supported him
 - There was sufficient administration of the empire

27. One of the following methods is used to catch fish in the deep sea. Which one is it?
- Harpooning
 - Line fishing
 - Traps and Barriers
 - Purse-seining

Which one of the following groups consists of abuse of human rights?

- | | |
|---|--|
| <p>A.</p> <ul style="list-style-type: none"> - Child labour - Early marriages | <p>B.</p> <ul style="list-style-type: none"> - Lack of shelter - Provision of food |
|---|--|

- C.
- | |
|---|
| <ul style="list-style-type: none"> - Discrimination on the basis of gender - Free education |
|---|

- D.
- | |
|---|
| <ul style="list-style-type: none"> - Lack of treatment for the sick - Proper clothing |
|---|

The following are ways of becoming a Kenyan citizen EXCEPT?

- Becoming a citizen of another country
- Use of false documents
- By registration
- If one of the parents is a non-Kenyan citizen

Below are characteristics of a certain type of soil.

- the soil particles are coarse
- they have large air spaces
- they have a little humus

The type of soil described above is

- Clay soil
- Sandy soil
- Alluvial soil
- Volcanic soil

Which one of the following methods is used in Mwea Tebere irrigation scheme?

- Overhead
- Canal
- Furrow
- Market gardening

Which one of the following is not a result of the coming of early visitors to Eastern Africa?

- Growth of Coastal towns
- Emergence of Swahili culture
- Killing of wild animals for horns and ivory
- Creation of kingdoms in the interior

33. Below are contributions of a prominent African leader.

- Won a nobel peace prize
- a great peacemaker
- Negotiated with the colonial government on the need for democracy

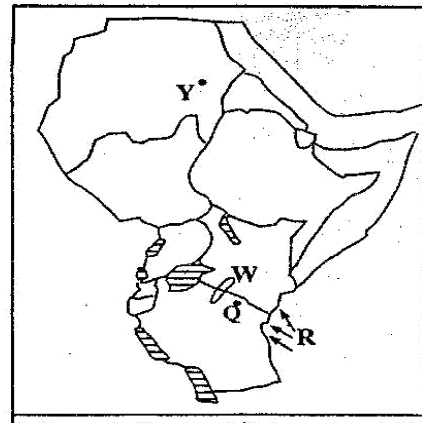
Which one of the following leaders is described above

- Wangari Mathai
- Nelson Mandela
- Haile Selassie
- Julius Nyerere

34. Which one of the following crops was grown in the pre-colonial period

- Sorghum
- Maize
- Sisal
- Wheat

Study the map of Eastern Africa below and answer questions 35 – 38



35. The prevailing winds marked R on the map are
- The North East trade winds
 - The westerlies
 - The South East trade winds
 - The south West trade winds
36. The pastoral community marked W in the map is
- The Maasai
 - The Karamajong
 - The Iteso
 - The Turkana
37. The town marked Q is
- Mwadui
 - Moshi
 - Mwanza
 - Dodoma
38. The pre-historic site marked Y on the map is
- Amara
 - Dongola
 - Meroe
 - Ologesaile

39. Which one of the following is the **main** problem facing horticultural farming in Kenya
 A. Labour shortage
 B. Inadequate capital
 C. Lack of market
 D. Lack of transport
40. The following minerals are matched with their uses. Which one is not?
 MINERAL USES
 A. Diatomite Manufacture of fertilizer
 B. Petroleum Tarmacking roads
 C. Salt Manufacture of paper
 D. Copper Replace and coat teeth
41. The following are functions of a town in Kenya?
 i) Residential centre
 ii) Fishing centre
 iii) Industrial centre
 iv) Tourist centre
 The town is likely to be
 A. Nakuru
 B. Thika
 C. Nairobi
 D. Malindi
42. The crops grown **mainly** for export in Kenya is?
 A. Flowers
 B. Bananas
 C. Maize
 D. Beans
43. Saidi a standard seven boy notices an **elderly** person who could not communicate. The easiest way for Saidi to communicate with the person is by the use of?
 A. Sign language
 B. Telephone
 C. hearing device
 D. Written message
44. A climatic conditions that favours dairy farming is
 A. cool and wet
 B. hot and dry
 C. cold and warm
 D. hot and wet
45. The Trans African Highway passes through the following towns **except**
 A. Kampala
 B. Kisangani
 C. Bungul
 D. Harare
46. Which one of the following is true about fish farming in Kenya?
 A. A lot of the fish from the farms is exported
 B. Fish are reared in the shallow ocean water
 C. The main type of fish reared are oysters, prawns, leels and trout
 D. There is inadequate capital to develop fish farming
47. The following are contributions of industries to the economy of South Africa. Which one is not?
 A. Creating employment opportunities
 B. Encouraging people to migrate to towns
 C. Encouraging exploitation of resources
 D. Sources of government revenue
48. The Cooper Motors Corporation (CMC) in Thika is an example of ?
 A. Manufacturing industry
 B. Service industry
 C. Assembling industry
 D. Processing industry
49. Three of the following are ways of demonstrating patriotism. Which one is **not**?
 A. Revealing the secrets of Kenya
 B. Attending National celebration
 C. Talking good of our country
 D. Cheering our national teams
50. The following statements are true about tourism in Kenya and Switzerland. Which one is **not**?
 A. Both countries receive the same number of tourists annually
 B. Tourists visit Switzerland mainly to see wildlife
 C. Both countries have beautiful sceneries such as snow-capped mountains
 D. Medicinal springs and spas are the main tourist attractions in both countries
51. The organization of African Unity (OAU) was formed in order to
 A. Promote unity among member countries
 B. Promote parliamentary democracy in member countries
 C. Offer financial aid to member states
 D. help create a strong African Unity
52. Three of the following are the roles of the school management committees. Which one is not?
 A. It admits new pupils to the school
 B. It supervises the work of teachers and school workers
 C. It implements development projects
 D. It ensures the traditions of the school are maintained
53. The following are statements about a type of democracy.
 i) *Leaders make decision on behalf of the citizens*
 ii) *Leaders communicate the needs of the people in important meetings*
 iii) *Citizens have powers to vote for the leaders in elections*
 The type of democracy referred to above is
 A. Participating democracy
 B. Representative democracy
 C. Delegative democracy
 D. Nomination democracy

54. The main reason why Kenya takes care of its National Parks is to
 A. Create jobs for people
 B. Protect wildlife for future generation
 C. Enable people to study plants and animals
 D. Put land to more economic use
55. In Kenya, a member of parliament may lose the parliamentary seat when the member
 A. Is unpopular among parliamentarians
 B. Makes little contribution in Harambees
 C. Is admitted in hospital for a long time
 D. Is elected the speaker of the National Assembly
56. The process of forming the National Government begins with
 A. Dissolution of parliament
 B. Announcement of election date
 C. Holding of general elections
 D. Appointment of cabinet secretaries
57. The main reason why Kenya trades with other countries is
 A. To earn foreign exchange from exports
 B. To obtain agricultural goods
 C. To encourage the exchange of ideas and information
 D. To promote friendly relations
58. The best way to resolve conflicts in a school is through
 A. Arbitration
 B. Enquiry
 C. Conciliation
 D. Dialogue
59. Three of the following are functions of Kenya police service EXCEPT
 A. Control traffic on the road
 B. Maintain peace in conflict areas
 C. Investigate crimes and arrest law breakers
 D. Assist in emergency and disasters
60. The best way of maintaining peace in cattle rustling areas is by
 A. Building more slaughterhouse in the areas
 B. Improving transport system in the area
 C. Building more schools and colleges
 D. Educating the communities on the importance of peace

SECTION B:

CHRISTIAN RELIGIOUS EDUCATION

61. The following statements are true about the creation story except.
 A. God said "It is not good for man to live alone".
 B. God gave man power over all fish
 C. The snake was given power over fire
 D. Man was put in the garden to guard and cultivate it
62. The two birds sent out of the ark by Noah during the floods were:

- A. Raven and eagle
 B. Raven and dove
 C. Dove and crow
 D. Crow and eagle
63. One of God's promises to Abraham was
 A. His descendants would be as many as the seas
 B. His descendants would be stars
 C. His descendants would be prophets
 D. His descendants would be great
64. Who among the following was not a son of Jacob?
 A. Joab
 B. Joseph
 C. Gad
 D. Rueben
65. The deliverance of the Israelites from Egypt was marked by many signs except
 A. The first borns of Egyptians were killed
 B. Blood was smeared on their feet
 C. The frogs were in Pharaohs palace
 D. Boils attacked the Egyptians
66. When Gideon went to fight the Midianites, he had _____ soldiers at the beginning. (*Judge 7:1 - 3*)
 A. 32,000
 B. 2,000
 C. 22,000
 D. 300
67. King Ahab sinned before God. Which two commandments did he break?
 A. Idolatry and murder
 B. Coveting and idolatry
 C. Adultery and idolatry
 D. Murder and coveting
68. Who advised Moses to choose judges to help him?
 A. Aaron
 B. Samuel
 C. Jethro
 D. Eli
69. The coming of the Holy Spirit was prophesied by
 A. Joel
 B. Micah
 C. Amos
 D. Hosea
70. Turn away from your sins and be baptized and God will forgive your sin" (Mk 1:4). These words ere said by:-
 A. Jesus
 B. Peter
 C. John the Baptist
 D. Paul
71. _____ is the only Historical book in the New testament.
 A. Luke
 B. acts
 C. Philemon
 D. Jude
72. After Jesus was tempted by the devil, He began His ministry in the town of
 A. Capernaum
 B. Galilee
 C. Jericho
 D. Bethany

73. Which of the following parables of Jesus teaches about prayers?
 A. The widow and the unjust judge
 B. The good Samaritan
 C. The great feast
 D. The prodigal son
74. Which one among the phrases below is not found in the Lord's prayer?
 A. Deliver us from evil
 B. Hallowed be thy name
 C. Thy will be done
 D. Life everlasting
75. Happy are the poor in spirit
 A. The kingdom of Heaven belongs to them
 B. They will see God
 C. They shall receive what God has promised
 D. God will satisfy them fully
76. Which of the following event took place during the transfiguration of Jesus
 A. The Holy spirit came down in the form of a dove
 B. His clothes became dazzling white
 C. There were a strong wind
 D. There was an earthquake
77. The following events took place during the crucifixion of Jesus. Arrange them in the correct order (LK 3:26 - 48).
 i) The soldiers mocked Him.
 ii) At about twelve o'clock the suns topped shinning.
 iii) The temple curtain was torn in two.
 iv) Darkness covered the whole country.
 A. v, ii, iv, iii, i
 B. i, v, iii, ii, iv
 C. i, v, ii, iv, iii
 D. iv, iii, v, i, ii
78. Who among the following was a deacon in the early church?
 A. Stephen
 B. Paul
 C. James
 D. Peter
79. Christians should be ready to suffer for their faith. An example of a martyr was
 A. Kabaka Mutesa II
 B. Kabaka Mwangwa
 C. Kabaka Mutesa I
 D. Charles Lwangwa
80. Paul was a tent maker. The people who worked with him were
 A. Priscilla and Dorcas
 B. Priscilla and Aquilla
 C. Lydia and Tabitha
 D. Aquilla and Simon
81. In the New testament, a man who was known for his generosity to the needy was
 A. Philip
 B. Ananias
 C. Silas
 D. Cornelius
82. Initiation is a rite of passage in African traditional society. The rite that comes immediately after it is
 A. Marriage
 B. Birth
 C. Death
 D. Naming
83. Life in traditional African society was continued through
 A. Marriage and birth of children
 B. The living, the living dead and the unborn
 C. Baptism and life after death
 D. Initiation and marriage
84. Identify the belief that is common in both traditional society in Africa and Christianity
 A. Christ will overcome all other powers
 B. One becomes a member through baptism
 C. Belief in the existence of life after death
 D. Ancestors are appeased through offering and pouring of libations
85. A std 8 girls has been daily seen in the company of boys from a secondary school. As a class senator, what action would you take?
 A. Report the girl to the headteacher
 B. Call a full student government board meeting
 C. Address the issue during assembly time
 D. Have a guidance and counselling session with the learner
86. Your classmate has told you that she suspects that she might be infected with HIV/AIDS. What advice would you give her? She should
 A. visit a witchdoctor
 B. visit a doctor for a check up
 C. wait for more symptoms to appear
 D. stop coming to school
87. Cigarette smoking is harmful to our health. One pupil of Mali primary school was found smoking in the toilet. What would be most effective way of helping her?
 A. Take her to the local chief
 B. Invite a health officer to school for advice
 C. Ask the headteacher to administer corporal punishment
 D. Isolate the pupil from her rest of the learners
88. Kaselo has not been playing with her peers of late. She has disclosed to her friends that she is having pain in her private parts. On further questioning by her teachers, she revealed that one of her relatives has been abusing her sexually. This kind of sexual misuse is:-
 A. Incest
 B. Bestiality
 C. Fornication
 D. Adultery
89. The 'children Act' clearly stipulates that children should enjoy all the following except
 A. Free basic education
 B. Parental love and care
 C. Adequate play time
 D. Free use of internet
90. Abortion is killing an unborn child. This is a lesson that is learnt under the
 A. School rules
 B. Ten commandments
 C. Sermon on the mount
 D. Peer tutorial commandments